

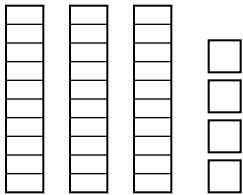
Place Value: Tens and Ones Worksheet - Answer Key

1st Grade - tens and ones to 99 | 12 minutes

Count the tens and ones. Write the number shown by the blocks.

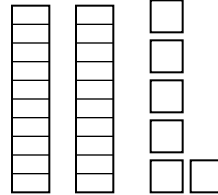
Example: 3 tens rods and 4 ones units -> 30 and 4 -> 34.

1. What number is shown?



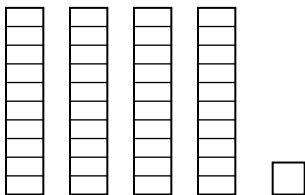
Answer: 34

2. What number is shown?



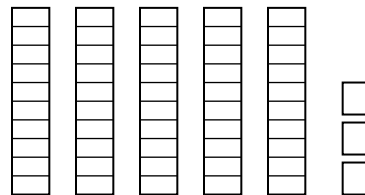
Answer: 26

3. What number is shown?



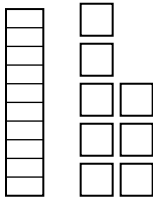
Answer: 41

4. What number is shown?



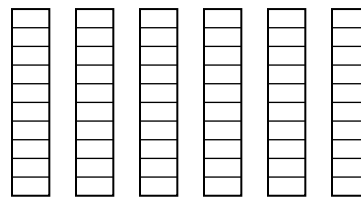
Answer: 53

5. What number is shown?



Answer: 18

6. What number is shown?



Answer: 60

Challenge

7. 47 has how many tens and how many ones?

Answer: 4 tens and 7 ones

8. Which is more: 3 tens and 5 ones, or 2 tens and 9 ones?

Answer: 3 tens and 5 ones (35 > 29)