

# Telling Time to the Hour and Half Hour (1st Grade) - Answer Key

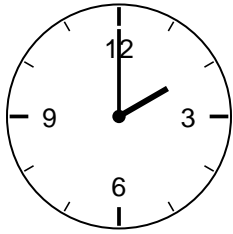
1st Grade - telling time to the hour and half hour | 12 minutes

---

Read each clock. Write the time on the line.

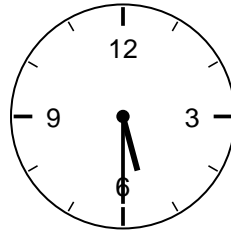
Example: Short hand on 2, long hand on 12 -> 2:00.

1. What time is it?



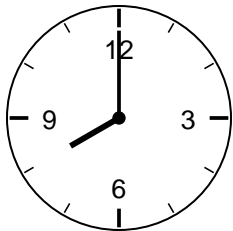
**Answer: 2:00**

2. What time is it?



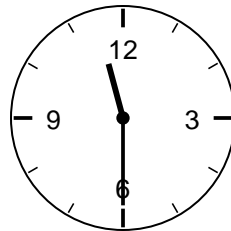
**Answer: 5:30**

3. What time is it?



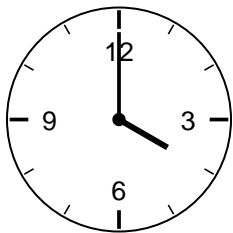
**Answer: 8:00**

4. What time is it?



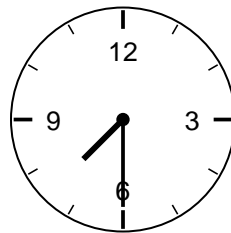
**Answer: 11:30**

5. What time is it?



**Answer: 4:00**

6. What time is it?



**Answer: 7:30**

## Challenge

7. Where does the long hand point at half past?

**Answer: On the 6.**

8. Where does the long hand point at o'clock?

**Answer: On the 12.**