

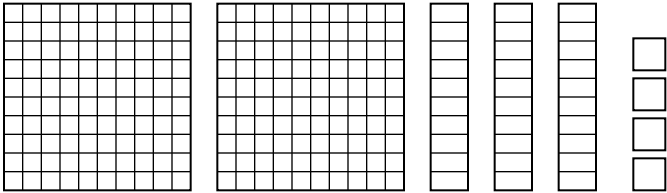
# Expanded Form Worksheet - Answer Key

2nd Grade - expanded form of three-digit numbers | 14 minutes

Write each number in expanded form (hundreds + tens + ones). For the first three, read the blocks.

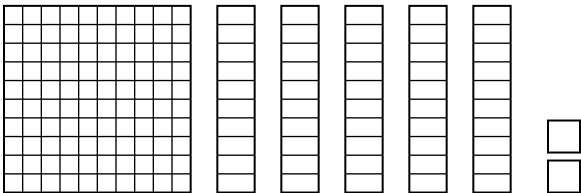
Example: 234 → 200 + 30 + 4.

1. Write the number shown in expanded form:




**Answer: 200 + 30 + 4**

2. Write the number shown in expanded form:



**Answer: 100 + 50 + 2**

3. Write the number shown in expanded form:



**Answer: 300 + 10 + 6**

4. Write 247 in expanded form.

**Answer: 200 + 40 + 7**

5. Write 580 in expanded form.

**Answer: 500 + 80 + 0**

6. Write 409 in expanded form.

**Answer: 400 + 0 + 9**

7. Write 763 in expanded form.

**Answer: 700 + 60 + 3**

8. Write 195 in expanded form.

**Answer: 100 + 90 + 5**

## Challenge

9. What number is  $600 + 70 + 2$ ?

**Answer: 672**

10. Write 306 in expanded form. Why is the tens part zero?

**Answer:  $300 + 0 + 6$  - there are no tens, so that place is zero.**