

# Place Value: Hundreds, Tens, and Ones Worksheet - Answer Key

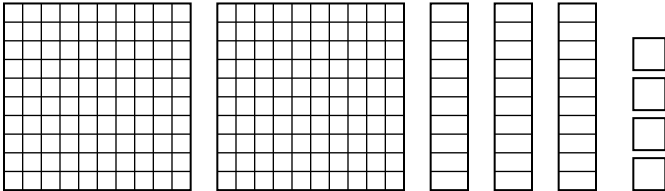
2nd Grade - hundreds, tens, and ones to 999 | 14 minutes

---

Count the hundreds, tens, and ones. Write the number shown by the blocks.

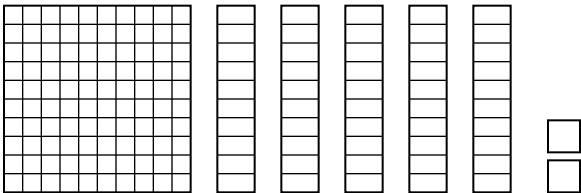
Example: 2 hundreds, 3 tens, 4 ones  $\rightarrow 200 + 30 + 4 \rightarrow 234$ .

1. What number is shown?



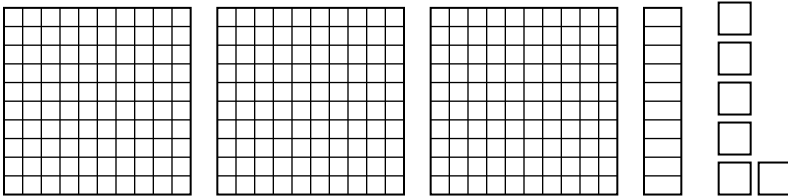
**Answer: 234**

2. What number is shown?




**Answer: 152**

3. What number is shown?



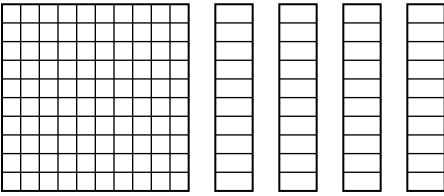
**Answer: 316**

4. What number is shown?



**Answer: 205**

5. What number is shown?



**Answer: 140**

### Challenge

6. Write 306 in expanded form (hundreds + tens + ones).

**Answer:  $300 + 0 + 6$**

7. How many tens are in 250?

**Answer: 25 tens**