

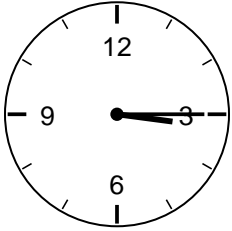
Quarter Past and Quarter To Worksheet - Answer Key

2nd Grade - telling time to the quarter hour | 12 minutes

Read each clock. Write the time. Quarter past is :15 (minute hand on 3); quarter to is :45 (minute hand on 9).

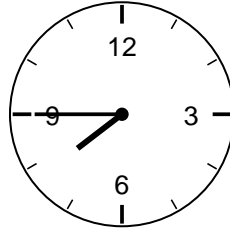
Example: Minute hand on 3 with hour hand just past 3 -> 3:15 (quarter past 3).

1. What time is it?



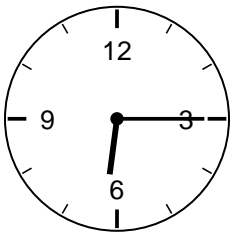
Answer: 3:15 (quarter past 3)

2. What time is it?



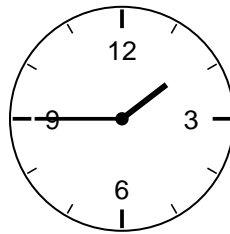
Answer: 7:45 (quarter to 8)

3. What time is it?



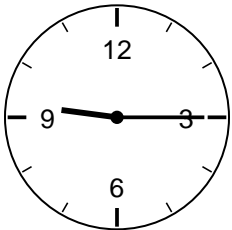
Answer: 6:15 (quarter past 6)

4. What time is it?



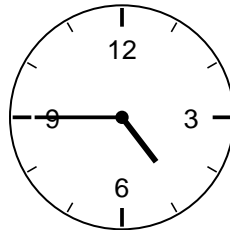
Answer: 1:45 (quarter to 2)

5. What time is it?



Answer: 9:15 (quarter past 9)

6. What time is it?



Answer: 4:45 (quarter to 5)

Challenge

7. What time is quarter past 2?

Answer: 2:15

8. What time is quarter to 5?

Answer: 4:45