

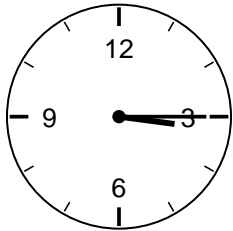
Telling Time to 5 Minutes Worksheet - Answer Key

2nd Grade - telling time to five minutes | 14 minutes

Read each clock to the nearest five minutes. Count the minute hand by fives. Write the time on the line.

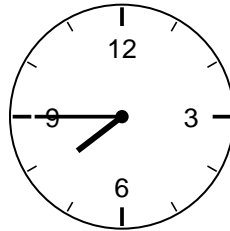
Example: Minute hand on 3 -> 5, 10, 15 -> 15 minutes. With the hour hand just past 4, the time is 4:15.

1. What time is it?




Answer: 3:15

2. What time is it?



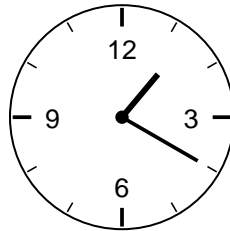
Answer: 7:45

3. What time is it?




Answer: 9:05

4. What time is it?




Answer: 1:20

5. What time is it?




Answer: 6:50

6. What time is it?



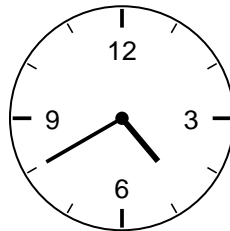
Answer: 10:35

7. What time is it?



Answer: 12:25

8. What time is it?



Answer: 4:40

Challenge

9. What time is 15 minutes after 2:00?

Answer: 2:15

10. When the minute hand points to 9, how many minutes past the hour is it?

Answer: 45 minutes