

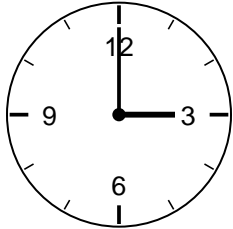
Telling Time to the Half Hour Worksheet - Answer Key

2nd Grade - telling time to the hour and half hour | 12 minutes

Read each clock. Write the time on the line.

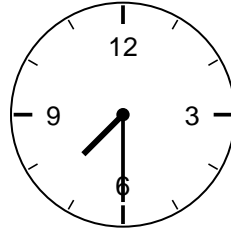
Example: Short hand halfway between 3 and 4, long hand on 6 -> 3:30.

1. What time is it?



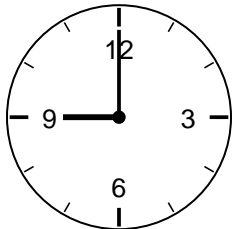
Answer: 3:00

2. What time is it?



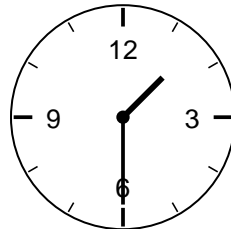
Answer: 7:30

3. What time is it?



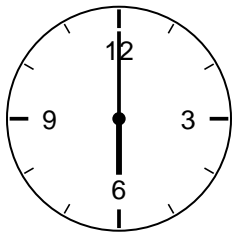
Answer: 9:00

4. What time is it?



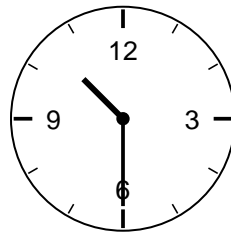
Answer: 1:30

5. What time is it?



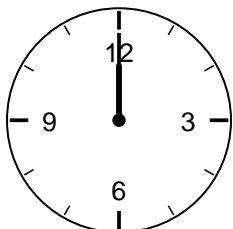
Answer: 6:00

6. What time is it?



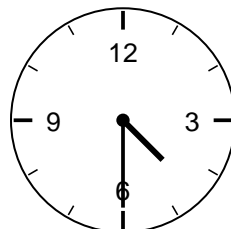
Answer: 10:30

7. What time is it?



Answer: 12:00

8. What time is it?



Answer: 4:30

Challenge

9. What time will it be 30 minutes after 8:00?

Answer: 8:30

10. When the long hand points to 6, how many minutes past the hour is it?

Answer: 30 minutes