

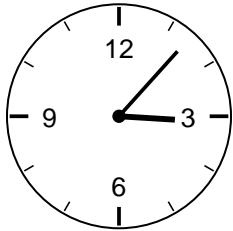
Telling Time to the Nearest Minute Worksheet - Answer Key

3rd Grade - telling time to the nearest minute | 14 minutes

Read each clock to the nearest minute. Count by fives to the nearest number, then count on the extra minutes.

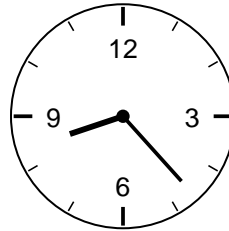
Example: Minute hand just past the 1: 5, then count on 2 more -> 7 minutes.

1. What time is it?




Answer: 3:07

2. What time is it?




Answer: 8:23

3. What time is it?



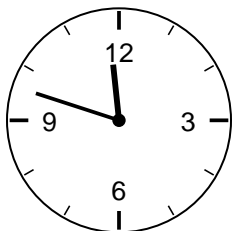
Answer: 5:12

4. What time is it?




Answer: 2:36

5. What time is it?



Answer: 11:48

6. What time is it?



Answer: 9:54

Challenge

7. The minute hand is on the 4 and one tick past. How many minutes is that?

Answer: 21 minutes

8. How many minutes are in one full trip of the minute hand around the clock?

Answer: 60 minutes