

# Types of Angles Worksheet (Acute, Right, Obtuse) - Answer Key

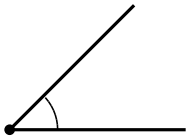
4th Grade - classifying angles as acute, right, or obtuse | 12 minutes

---

Write whether each angle is acute, right, or obtuse. Compare each one to a right angle (a square corner).

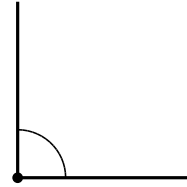
Example: An angle that opens exactly like a square corner is a right angle (90 degrees).

1. Acute, right, or obtuse?



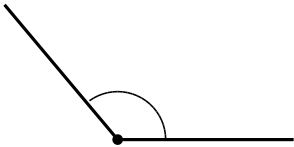
**Answer: acute**

2. Acute, right, or obtuse?



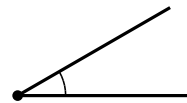
**Answer: right**

3. Acute, right, or obtuse?



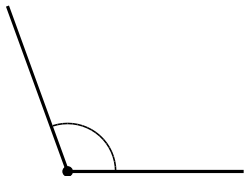
**Answer: obtuse**

4. Acute, right, or obtuse?



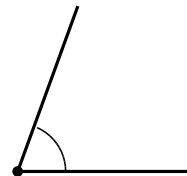
**Answer: acute**

5. Acute, right, or obtuse?



**Answer: obtuse**

6. Acute, right, or obtuse?



**Answer: acute**

## Challenge

7. How many degrees is a right angle?

**Answer: 90 degrees**

8. Is an 89-degree angle acute or obtuse?

**Answer: acute (just less than 90 degrees)**