


Count the Objects (to 10) Worksheet - Answer Key

Kindergarten - counting objects to 10 | 8 minutes

Count the objects in each box. Write how many on the line.


Example: Count the circles, then write the number you reach.

1. Count the circles. How many?




Answer: 4

3. Count the squares. How many?



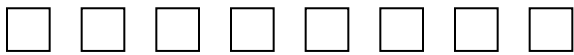
Answer: 3

5. Count the circles. How many?



Answer: 5

7. Count the squares. How many?



Answer: 8

2. Count the stars. How many?



Answer: 6

4. Count the triangles. How many?



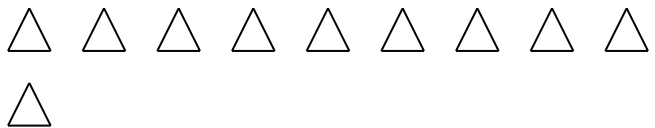
Answer: 7

6. Count the stars. How many?



Answer: 9


8. Count the triangles. How many?



Answer: 10

Challenge

9. Count the circles. Then imagine 2 more. How many would there be?



Answer: $5 + 2 = 7$