

# Ten-Frames to 10 Worksheet - Answer Key

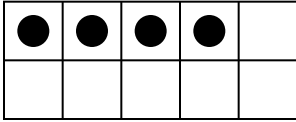
Kindergarten - ten-frames and number sense to 10 | 8 minutes

---

Count the dots in each ten-frame. Write how many on the line.

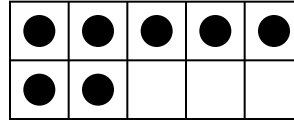
Example: A full top row is 5. If the bottom row has 2 dots, that is 5 and 2 more -> 7.

1. How many dots?



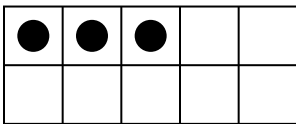
Answer: 4

2. How many dots?




Answer: 7

3. How many dots?



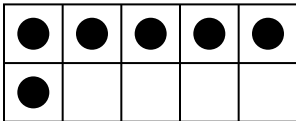
Answer: 3

4. How many dots?




Answer: 9

5. How many dots?



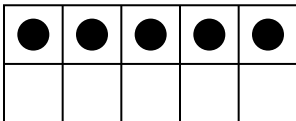
Answer: 6

6. How many dots?



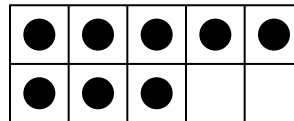
Answer: 10

7. How many dots?



Answer: 5

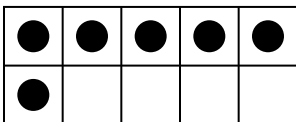
8. How many dots?



Answer: 8

## Challenge

9. This ten-frame shows 6. How many empty cells are left?



Answer: 4 empty cells