

# Count Sides and Corners Worksheet - Answer Key

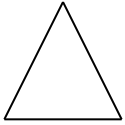
Kindergarten - sides and corners of 2D shapes | 10 minutes

---

Count the sides or corners of each shape. Write your answer on the line.

Example: A triangle has 3 sides and 3 corners.

1. How many sides?



**Answer: 3**

2. How many corners?



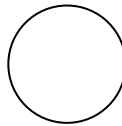
**Answer: 4**

3. How many sides?



**Answer: 4**

4. How many corners?



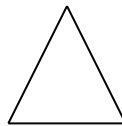
**Answer: 0 (none)**

5. How many points does this star have?



**Answer: 5**

6. How many corners?



**Answer: 3**

## Challenge

7. Which has more sides: a triangle or a square?

**Answer: a square (4 sides vs 3)**

8. Name a shape that has no corners.

**Answer: a circle**