

Place Value: Tens and Ones Worksheet

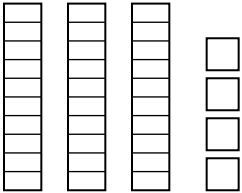
1st Grade - tens and ones to 99 | 12 minutes

Name: _____ Date: _____

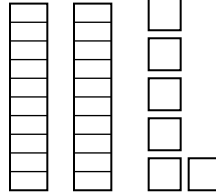
Count the tens and ones. Write the number shown by the blocks.

Example: 3 tens rods and 4 ones units -> 30 and 4 -> 34.

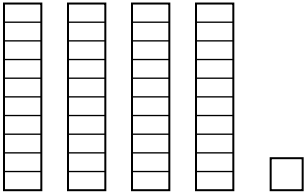
1. What number is shown?



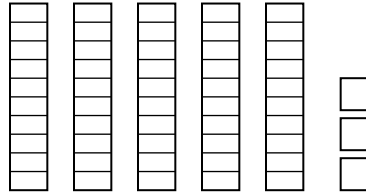
2. What number is shown?



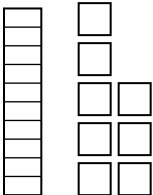
3. What number is shown?



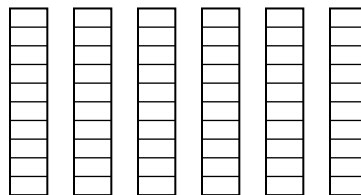
4. What number is shown?



5. What number is shown?



6. What number is shown?



Challenge

7. 47 has how many tens and how many ones?

8. Which is more: 3 tens and 5 ones, or 2 tens and 9 ones?
