

Telling Time to the Hour and Half Hour (1st Grade)

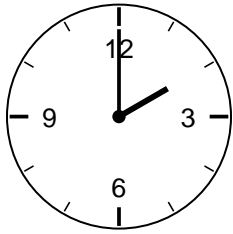
1st Grade - telling time to the hour and half hour | 12 minutes

Name: _____ Date: _____

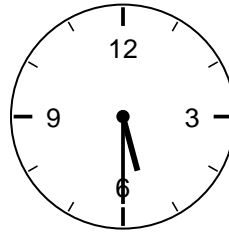
Read each clock. Write the time on the line.

Example: Short hand on 2, long hand on 12 -> 2:00.

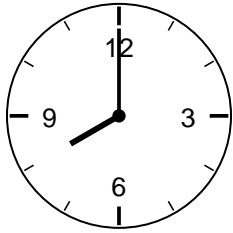
1. What time is it?



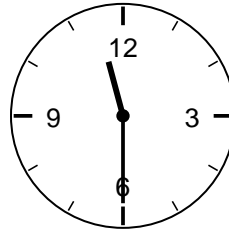
2. What time is it?



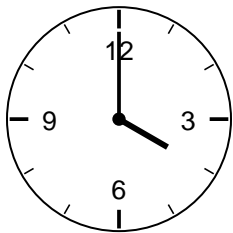
3. What time is it?



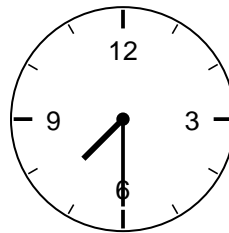
4. What time is it?



5. What time is it?



6. What time is it?



Challenge

7. Where does the long hand point at half past?

8. Where does the long hand point at o'clock?
