

Arrays and Repeated Addition Worksheet


2nd Grade - arrays and repeated addition | 12 minutes

Name: _____ Date: _____


Look at each array. Write the repeated addition sentence and the total.

Example: 3 rows of 4: $4 + 4 + 4 = 12$.


1. Write the repeated addition and total for this array:




2. Write the repeated addition and total for this array:




3. Write the repeated addition and total for this array:




4. Write the repeated addition and total for this array:



5. Write the repeated addition and total for this array:



6. Write the repeated addition and total for this array:



Challenge

7. How many rows of 5 make 20? Write the repeated addition.

8. Draw an array that shows $3 + 3 + 3$. How many in all?
