

# Expanded Form Worksheet

2nd Grade - expanded form of three-digit numbers | 14 minutes


---

Name: \_\_\_\_\_ Date: \_\_\_\_\_

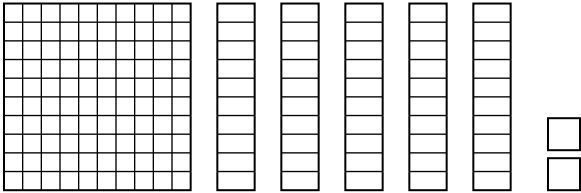
**Write each number in expanded form (hundreds + tens + ones). For the first three, read the blocks.**

Example: 234 -> 200 + 30 + 4.


1. Write the number shown in expanded form:



2. Write the number shown in expanded form:



3. Write the number shown in expanded form:



4. Write 247 in expanded form.

\_\_\_\_\_

5. Write 580 in expanded form.

\_\_\_\_\_

6. Write 409 in expanded form.

\_\_\_\_\_

7. Write 763 in expanded form.

---

8. Write 195 in expanded form.

---

### **Challenge**

9. What number is  $600 + 70 + 2$ ?

---

10. Write 306 in expanded form. Why is the tens part zero?

---