

Place Value: Hundreds, Tens, and Ones Worksheet

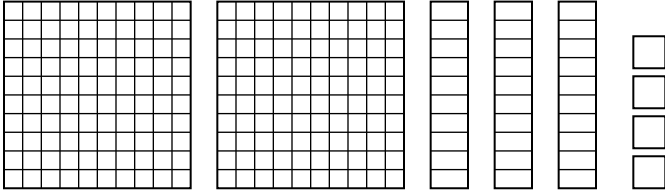
2nd Grade - hundreds, tens, and ones to 999 | 14 minutes

Name: _____ Date: _____

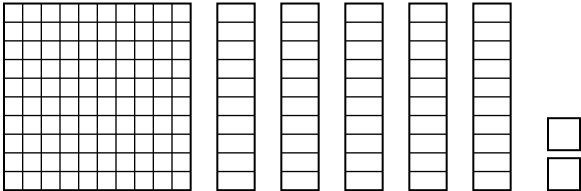
Count the hundreds, tens, and ones. Write the number shown by the blocks.

Example: 2 hundreds, 3 tens, 4 ones -> $200 + 30 + 4 \rightarrow 234$.


1. What number is shown?




2. What number is shown?



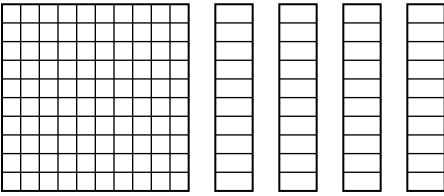
3. What number is shown?



4. What number is shown?



5. What number is shown?



Challenge

6. Write 306 in expanded form (hundreds + tens + ones).

7. How many tens are in 250?
