

Draw the Hands on the Clock Worksheet

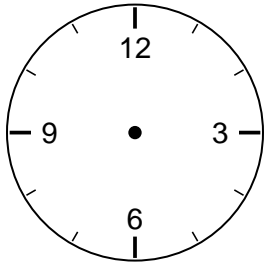
2nd Grade - drawing clock hands to show a time | 12 minutes

Name: _____ Date: _____

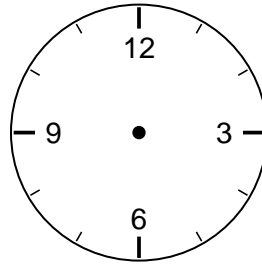
Draw the hands on each clock to show the time. Make the hour hand short and the minute hand long.

Example: For 3:00, draw the short hand to 3 and the long hand to 12.

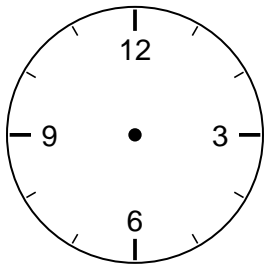
1. Draw the time: 3:00



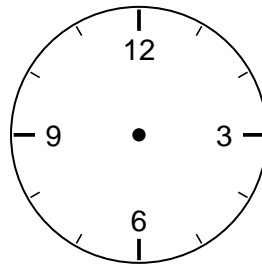
2. Draw the time: 6:30



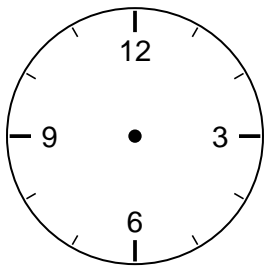
3. Draw the time: 9:00



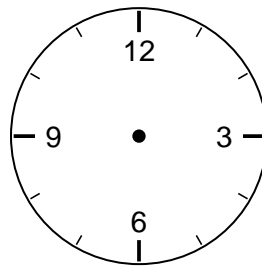
4. Draw the time: 1:30



5. Draw the time: 7:00

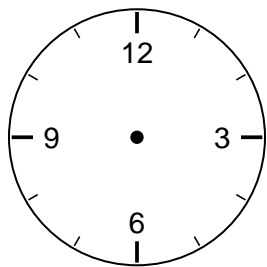


6. Draw the time: 4:30



Challenge

7. Draw the time: 10:15



8. At half past any hour, which number does the minute hand point to?
