

Quarter Past and Quarter To Worksheet

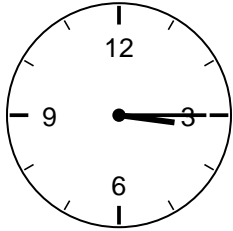
2nd Grade - telling time to the quarter hour | 12 minutes

Name: _____ Date: _____

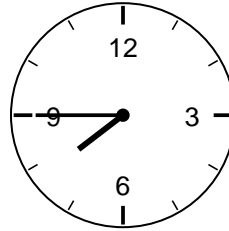
Read each clock. Write the time. Quarter past is :15 (minute hand on 3); quarter to is :45 (minute hand on 9).

Example: Minute hand on 3 with hour hand just past 3 -> 3:15 (quarter past 3).

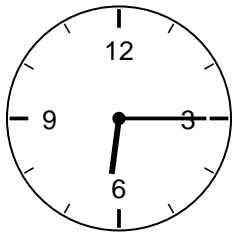
1. What time is it?



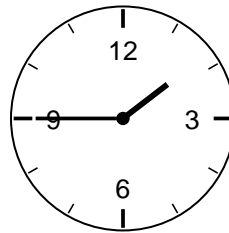
2. What time is it?



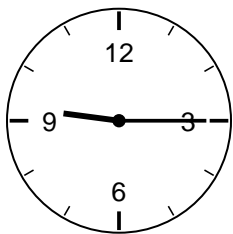
3. What time is it?



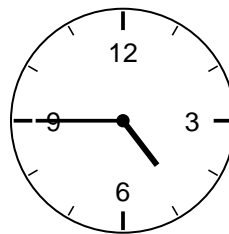
4. What time is it?



5. What time is it?



6. What time is it?



Challenge

7. What time is quarter past 2?

8. What time is quarter to 5?
