

Telling Time to 5 Minutes Worksheet

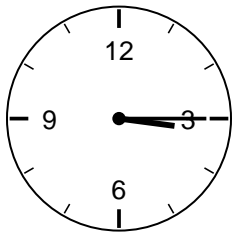
2nd Grade - telling time to five minutes | 14 minutes

Name: _____ Date: _____

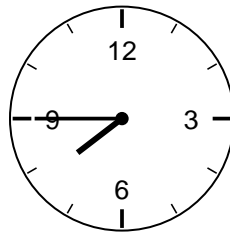
Read each clock to the nearest five minutes. Count the minute hand by fives. Write the time on the line.

Example: Minute hand on 3 -> 5, 10, 15 -> 15 minutes. With the hour hand just past 4, the time is 4:15.


1. What time is it?



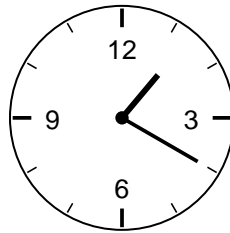
2. What time is it?




3. What time is it?




4. What time is it?




5. What time is it?



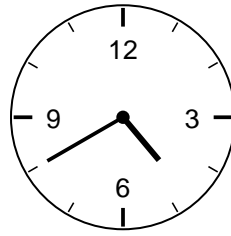
6. What time is it?



7. What time is it?



8. What time is it?



Challenge

9. What time is 15 minutes after 2:00?

10. When the minute hand points to 9, how many minutes past the hour is it?
