

Telling Time to the Half Hour Worksheet

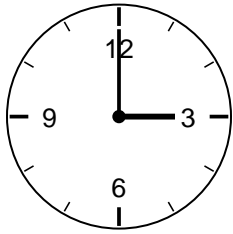
2nd Grade - telling time to the hour and half hour | 12 minutes

Name: _____ Date: _____

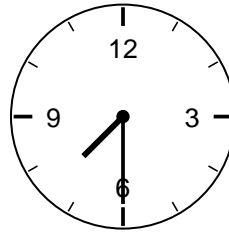
Read each clock. Write the time on the line.

Example: Short hand halfway between 3 and 4, long hand on 6 -> 3:30.

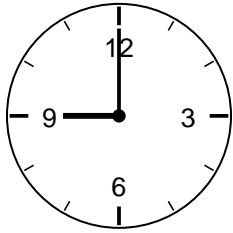
1. What time is it?



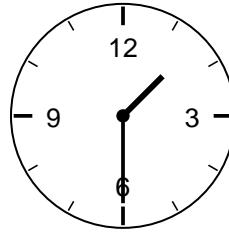
2. What time is it?



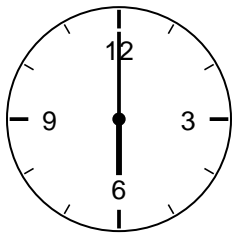
3. What time is it?



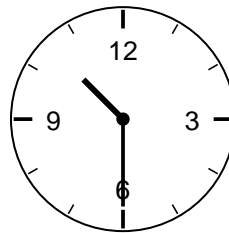
4. What time is it?



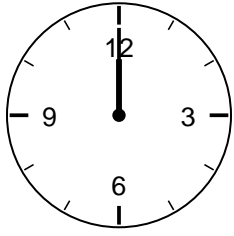
5. What time is it?



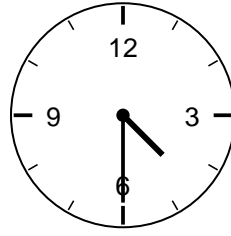
6. What time is it?



7. What time is it?



8. What time is it?



Challenge

9. What time will it be 30 minutes after 8:00?

10. When the long hand points to 6, how many minutes past the hour is it?
