

Multiplication Arrays Worksheet


3rd Grade - arrays and equal groups | 12 minutes

Name: _____ Date: _____


Each problem describes an array. Write the multiplication sentence (rows \times columns) and the product.

Example: An array with 2 rows of 5 $\rightarrow 2 \times 5 = 10$.


1. Write the multiplication sentence and product for this array:




2. Write the multiplication sentence and product for this array:




3. Write the multiplication sentence and product for this array:




4. Write the multiplication sentence and product for this array:




5. Write the multiplication sentence and product for this array:




6. Write the multiplication sentence and product for this array:



7. Write the multiplication sentence and product for this array:



8. Write the multiplication sentence and product for this array:



Challenge

9. An array has 7 rows of 3. How many in all?

10. Draw two different arrays that both equal 12. Write a sentence for each.
