

Telling Time to the Nearest Minute Worksheet


3rd Grade - telling time to the nearest minute | 14 minutes

Name: _____ Date: _____

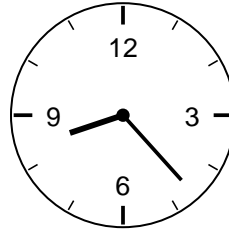
Read each clock to the nearest minute. Count by fives to the nearest number, then count on the extra minutes.

Example: Minute hand just past the 1: 5, then count on 2 more -> 7 minutes.

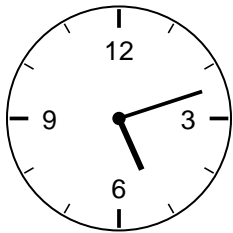
1. What time is it?



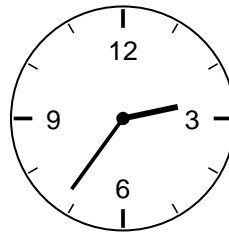
2. What time is it?



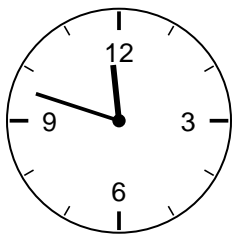
3. What time is it?




4. What time is it?



5. What time is it?



6. What time is it?



Challenge

7. The minute hand is on the 4 and one tick past. How many minutes is that?

8. How many minutes are in one full trip of the minute hand around the clock?
