

Types of Angles Worksheet (Acute, Right, Obtuse)

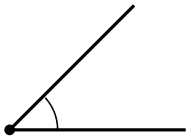
4th Grade - classifying angles as acute, right, or obtuse | 12 minutes

Name: _____ Date: _____

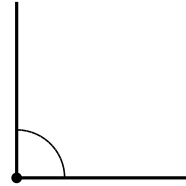
Write whether each angle is acute, right, or obtuse. Compare each one to a right angle (a square corner).

Example: An angle that opens exactly like a square corner is a right angle (90 degrees).

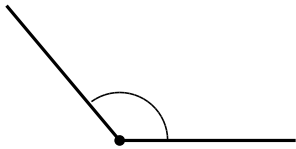
1. Acute, right, or obtuse?



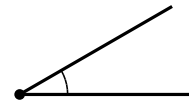
2. Acute, right, or obtuse?



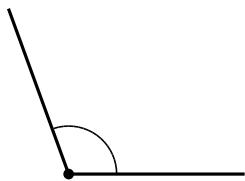
3. Acute, right, or obtuse?



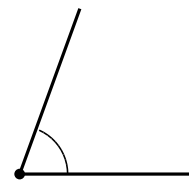
4. Acute, right, or obtuse?



5. Acute, right, or obtuse?



6. Acute, right, or obtuse?



Challenge

7. How many degrees is a right angle?

8. Is an 89-degree angle acute or obtuse?
