

Ten-Frames to 10 Worksheet

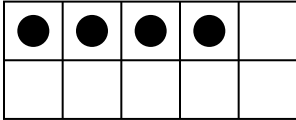
Kindergarten - ten-frames and number sense to 10 | 8 minutes

Name: _____ Date: _____

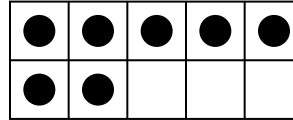
Count the dots in each ten-frame. Write how many on the line.

Example: A full top row is 5. If the bottom row has 2 dots, that is 5 and 2 more -> 7.

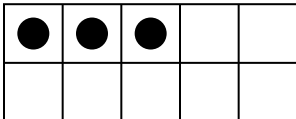
1. How many dots?




2. How many dots?



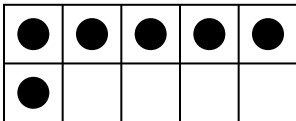
3. How many dots?




4. How many dots?



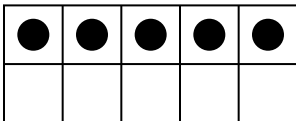
5. How many dots?



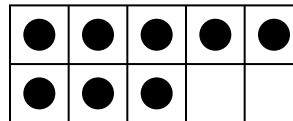
6. How many dots?



7. How many dots?



8. How many dots?



Challenge

9. This ten-frame shows 6. How many empty cells are left?

