

Count Sides and Corners Worksheet


Kindergarten - sides and corners of 2D shapes | 10 minutes

Name: _____ Date: _____

Count the sides or corners of each shape. Write your answer on the line.

Example: A triangle has 3 sides and 3 corners.

1. How many sides?



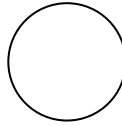
2. How many corners?



3. How many sides?



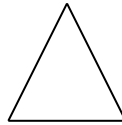
4. How many corners?



5. How many points does this star have?



6. How many corners?



Challenge

7. Which has more sides: a triangle or a square?

8. Name a shape that has no corners.
